

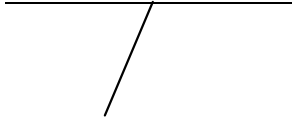
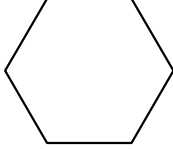



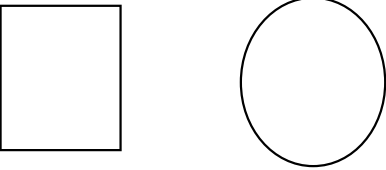
July Summer Math Calendar - Entering Grade 3

Solve one problem each day for the month of July. ~~Show your work and your answer in the blue book provided.~~

Date	Questions	Date	Questions
7/1	$\begin{array}{r} 456 \\ + 634 \\ \hline \end{array}$	7/9	What is the name of the 90° angle? 
7/2	What do the short and long hand on a clock tell? 	7/10	$\begin{array}{r} 932 \\ - 287 \\ \hline \end{array}$
7/3	Write the fact family for 5, 7, and 12.	7/11	What is the name of these lines? 
7/4	$\begin{array}{c} 2 \text{ in} \\ \square \\ 2 \text{ in} \end{array}$ What is the perimeter?	7/12	Measure a book to the nearest inch.
7/5	$\begin{array}{r} 759 \\ + 346 \\ \hline \end{array}$	7/13	Find the sum. $\begin{array}{r} \$0.67 \\ + \$0.25 \\ \hline \end{array}$
7/6	Joey has 10 stamps. He gives 6 to his friend. How many stamps does Joey have left?	7/14	 ___ sides ___ vertices
7/7	The time is 6:30. What time will it be in 15 minutes?	7/15	Show how to make \$1.00 using quarters.
7/8	Write the missing signs from the number sentence below. $13 = 6 \text{ ___ } 7$	7/16	What is the name of this 3-D shape? 

Parent Signature _____

July Summer Math Calendar - Entering Grade 3

Date	Questions	Date	Questions
7/17	Add. $\begin{array}{r} 349 \\ + 273 \\ \hline \end{array}$	7/25	Kimmy has 1 quarter, 2 dimes, 3 nickels and 4 pennies in her pocket. What is the value of the money Kimmy has in her pocket?
7/18	Oranges cost \$ 2.75. if you pay with a \$ 5.00 bill, how much change will you receive?	7/26	Draw a pentagon.
7/19	Draw a rectangle and make 3 equal parts.	7/27	Look around your house for 2 examples of a sphere. Write the objects you found.
7/20	Draw a circle. Divide the circle into four equal parts.	7/28	Measure the length of a piece of paper to the nearest inch .
7/21	What digit is in the tens place in the following number? 865	7/29	Draw a rectangle and make 3 equal parts.
7/22	What digit is in the hundreds place in the following number? 865	7/30	Using coins show 2 different ways to make 50 cents.
7/23	There are 28 cookies. 13 cookies are eaten. How many cookies are left?	7/31	Use the digits 4, 7, 1 to make the smallest number possible.
7/24	 Divide each shape into halves.		Continue to study your addition and subtraction facts throughout the summer so you will be ready for third grade math.

Parent Signature _____


August Summer Math Calendar - Entering Grade 3

Solve one problem each day for the month of August. ~~Show your work and your answer in the blue book provided.~~

Date	Questions	Date	Questions
8/1	5 tens = _____ 32 hundreds = _____	8/9	$\begin{array}{r} 746 \\ - 284 \\ \hline \end{array}$
8/2	Write the digital time for “a quarter to 3”.	8/10	1 week = _____ days 1 year = _____ months
8/3	Use < , > or = . 56,728 _____ 56,782	8/11	Add: 6 + 2 + 5 = 4 + 5 + 6 = 1 + 10 + 9 =
8/4	5 buckets had three tennis balls in each bucket. How many tennis balls in all ?	8/12	Draw a rhombus. How many sides does it have?
8/5	1 hour = _____ minutes $\frac{1}{2}$ hour = _____ minutes	8/13	The time is 6:35. 20 minutes later it will be _____.
8/6	☺ ☺ ☺ Cross out 6 smiley faces. Write a subtraction number sentence to show how many are left.	8/14	1 week = _____ days 2 weeks = _____ days 3 weeks = _____ days
8/7	Use the digits 2, 8, 4, 1 to make the largest number possible.	8/15	Find something in your house that is about 1 foot long. Draw and label it.
8/8	Put these numbers in order from least to greatest. 640, 710, 620, 910, 325	8/16	Count by 5s from 30 to 60.

Parent Signature _____

August Summer Math Calendar - Entering Grade 3

Date	Questions	Date	Questions
8/17	Largest amount = _____ Smallest amount = _____ \$ 24.06, \$ 9.99, \$ 19.99, \$ 14.98	8/25	Find an object in your house that is about 6 inches long. Draw and label it.
8/18	8 flowerboxes have 4 plants in each of them. How many plants are in all?	8/26	Count by 10s from 140 to 210
8/19	A pentagon has _____ sides. A hexagon has _____ sides.	8/27	Solve: $14 - 7 + 4 = \underline{\hspace{2cm}}$ $20 - 10 + 6 = \underline{\hspace{2cm}}$
8/20	Make the fact family for the digits 2, 4, and 6 . $\underline{\hspace{1cm}} + \underline{\hspace{1cm}} = \underline{\hspace{1cm}}$ $\underline{\hspace{1cm}} + \underline{\hspace{1cm}} = \underline{\hspace{1cm}}$ $\underline{\hspace{1cm}} - \underline{\hspace{1cm}} = \underline{\hspace{1cm}}$ $\underline{\hspace{1cm}} - \underline{\hspace{1cm}} = \underline{\hspace{1cm}}$	8/28	Find the value of the square. $\square - 23 = 17$
8/21	A toy costs \$ 4.22 and you hand the cashier a \$ 10 bill. How much change should you receive?	8/29	Find the value of the square. $456 + \square = 600$
8/22	Fill in the missing numbers. 46, 48, _____, 52, _____, _____	8/30	Draw 2 different polygons with 4 sides .
8/23	$4 + 3 + 7 = 40$ Is this math number sentence true? If not, change the sum to make it true.	8/31	A dolphin swam 80 miles. A fish swam 40 miles. How much farther did the fish swim?
8/24	What number is 10 more? 468 _____ 5,889 _____ 1,999 _____		Have a wonderful year in third grade! Don't forget to challenge yourself with Xtra Math and Front Row Math over the summer, too. 

Parent Signature _____